

MATHEMA

FUTOŠIKI

6×6

LAHKI



VAJE PRI TEKMOVANJU ZA PRIZNANJE
LOGIČNE POŠASTI

5. IN 6. RAZRED

VIRI:

[HTTPS://WWW.BRAINBASHERS.COM/FUTOSHIKI.ASP](https://www.brainbashers.com/futoshiki.asp)


[HTTP://WWW.FUTOSHIKI.ORG/](http://www.futoshiki.org/)

[HTTP://WWW.SUDOKU-PUZZLES.NET/EN/LOGIC-PUZZLES/FUTOSHIKI](http://www.sudoku-puzzles.net/en/logic-puzzles/futoshiki)

NAVODILA:

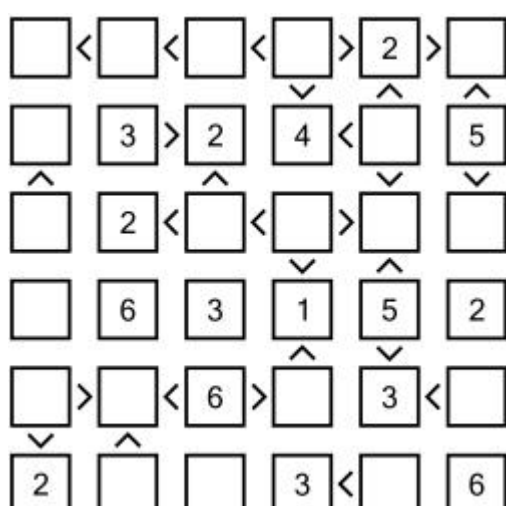



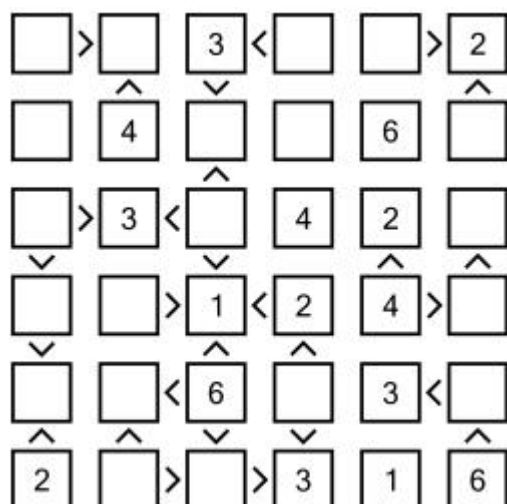

V prazna polja vnesi številke od 1 do 6, tako da bodo v vsaki vrstici in v vsakem stolpcu vse številke različne in da bodo zadoščale neenakostim $>$ in $<$.

ZGLED:



REŠITVE SO NA STRANI 5.





REŠITVE

